

DATA *Nugget*

Urbanization and Estuary Eutrophication

Featured scientists: Charles Hopkins from University of Georgia and Hap Garritt from the MBL Ecosystems Center

Research Background:

An estuary is a habitat formed where a freshwater river or stream meets a saltwater ocean. Many estuaries can be found along the Atlantic coast of North America. Reeds and grasses are the dominant type of plant in estuaries because they are able to tolerate and grow in the salty water. Where these reeds and grasses grow they form a special habitat called a **salt marsh**. Salt marshes are important because they filter polluted water and buffer the land from storms. Salt marshes are the habitat for many different kinds of plants, fish, shellfish, and birds.

Scientists are worried because some salt marshes are in trouble! Runoff from rain washes nutrients, usually from lawn fertilizers and agriculture, from land and carries them to estuaries. When excess nutrients, such as **nitrogen** or **phosphorus**, enter an ecosystem the natural balance is disrupted. The ecosystem becomes more productive, called **eutrophication**. Eutrophication can cause major problems for estuaries and other habitats.

With more nutrients in the ecosystem, the growth of plants and algae explodes. During the day, algae photosynthesize and release O_2 as a byproduct. However, excess nutrients cause these same algae grow densely near the surface of the water, decreasing the light available to plants growing below the water on the soil surface. Without light, the plants die and are broken down by decomposers. Decomposers, such as bacteria, use a lot of O_2 because they respire as they break down plant material. Because there is so much dead plant material for decomposers, they use up most of the O_2 dissolved in the water. Eventually there is not enough O_2 for aquatic animals, such as fish and shellfish, and they begin to die-off as well.



View of a salt marsh in Plum Island Estuary. Photo by Harriet Booth.

Two features can be used to identify whether eutrophication is occurring. The first feature is low levels of dissolved O_2 in the water. The second feature is when there are large changes in the amount of dissolved O_2 from dawn to dusk. Remember, during the day when it's sunny, photosynthesis converts CO_2 , water, and light into glucose and O_2 . Decomposition reverses the process, using glucose and O_2 and producing CO_2 and water. This means that when the sun is down at night, O_2 is not being added to the water from photosynthesis. However, O_2 is still being used for decomposition and respiration by animals and plants at night.

Scientists Charles and Hap have studied estuaries most of their careers. Over time they noticed a serious decline in estuary health worldwide. The health of their local estuary, Plum Island Estuary in Massachusetts, appeared to be declining over time as well. They noticed a loss of salt marsh habitats, and that the remaining salt marshes had fewer fish. They thought that urbanization nearby might be causing these losses. Charles and Hap set out to test if the loss of salt marshes in Plum Island Estuary was occurring because of eutrophication from large amounts of excess nutrients entering the estuary in runoff from the nearby urban areas.

The scientists focused on two locations in the Plum Island Estuary and measured **dissolved O_2 levels**, or the amount of O_2 in the water. They looked at how the levels of O_2 changed throughout the day and night. They predicted that the **upper** part of the estuary would show the two features of eutrophication because it is located near an urban area. They also predicted the **lower** part of the estuary would not be affected by eutrophication because it was farther from urban areas.



Hap Garritt removing an oxygen logger from Middle Road Bridge in winter.

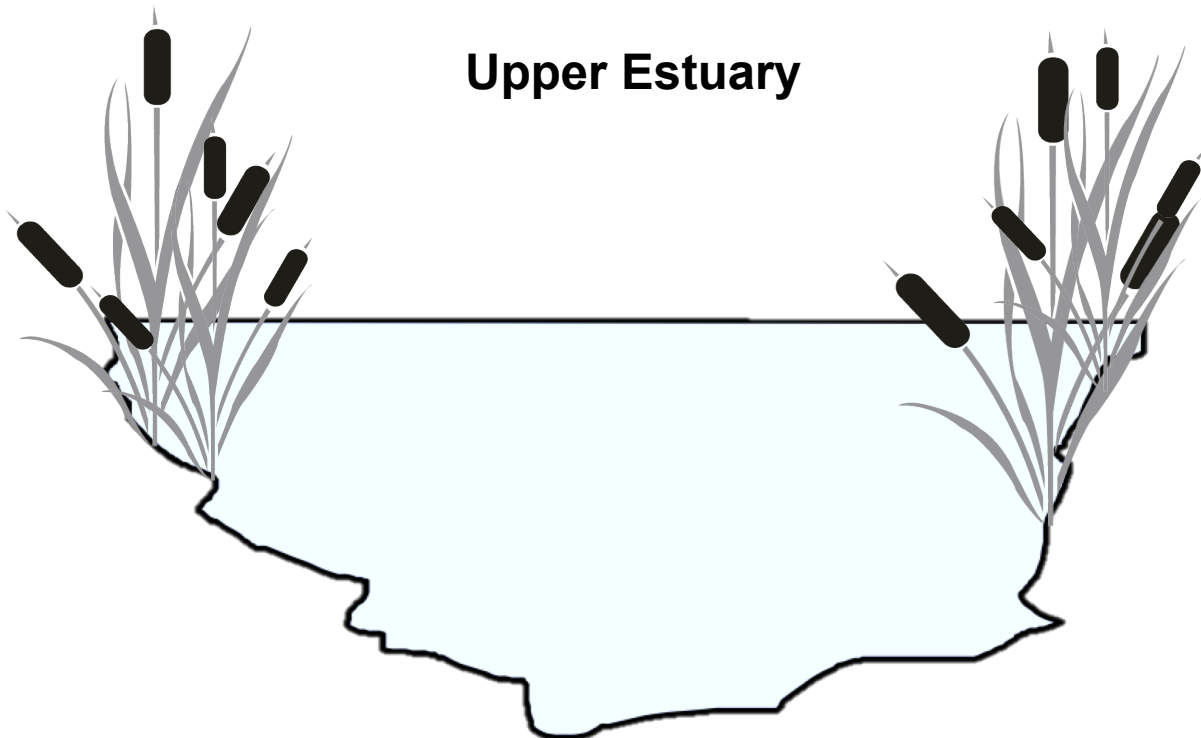
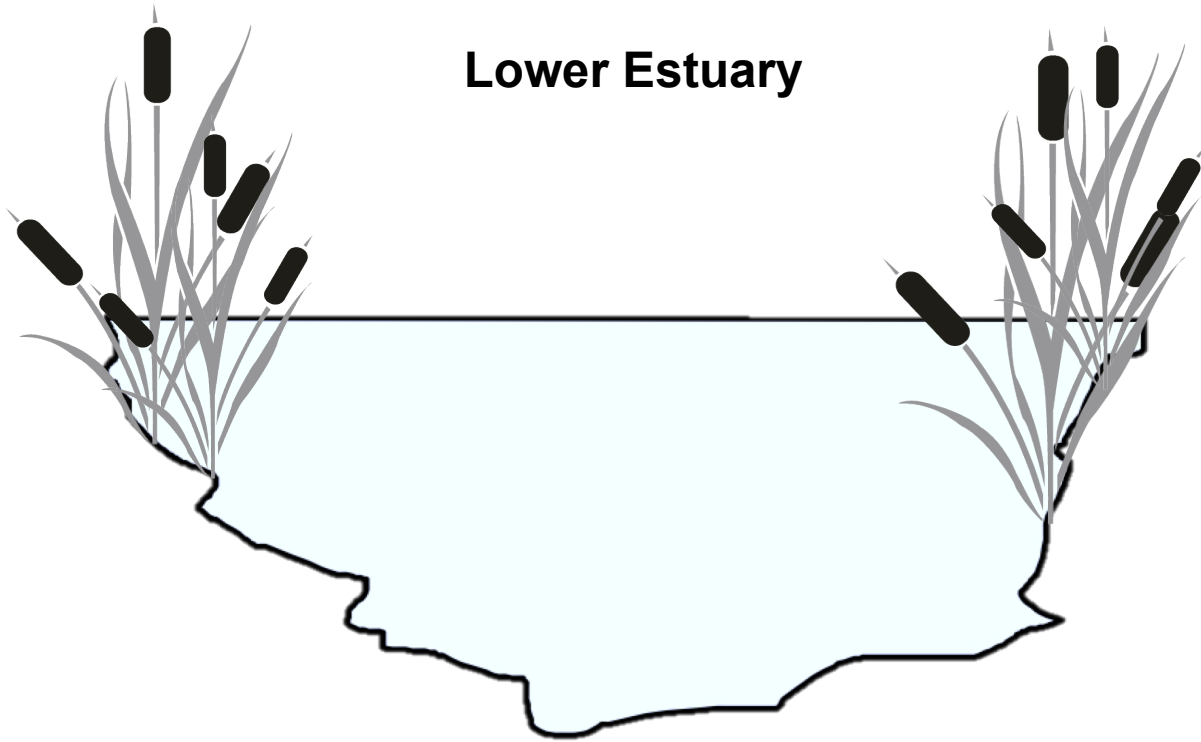
Scientific Question: What are the effects of urbanization on salt marshes in the Plum Island Estuary?

What is the hypothesis? Find the hypothesis in the Research Background and underline it. A hypothesis is a proposed explanation for an observation, which can then be tested with experimentation or other types of studies.



Charles Hopkinson out taking dissolved O_2 measurements.

Draw your predictions: Fill in the diagram to show your predictions for the upper and lower parts of the Plum Island Estuary. Be sure to include the following organisms: 1) algae, 2) plants, 3) decomposers, and 4) fish. Also include your predictions for levels of 1) nitrogen (N), 2) phosphorus (P), and 3) dissolved oxygen (O_2) in each location. Label each part of your diagram or create a legend.



Scientific Data

Complete the tables and use the data below to answer the scientific question:

Part of Estuary	Sample number	Dawn O ₂ (mg/l)	Dusk O ₂ (mg/l)	Fluctuation in Dissolved O ₂ (dusk - dawn)
Upper Estuary	1	10	11	
Upper Estuary	2	7	12	
Upper Estuary	3	7.5	10	
Lower Estuary	1	11.2	12.8	
Lower Estuary	2	8.5	9.5	
Lower Estuary	3	9	10	

Dissolved O ₂				
Part of Estuary	Dawn Mean	Dawn SE	Dusk Mean	Dusk SE
Upper Estuary		0.9		0.6
Lower Estuary		0.8		1.0

Fluctuation in Dissolved O ₂		
Part of Estuary	Mean	SE
Upper Estuary		1.2
Lower Estuary		0.2

What data will you graph to answer the question?

Graph 1:

Independent variable: _____

Dependent variable: _____

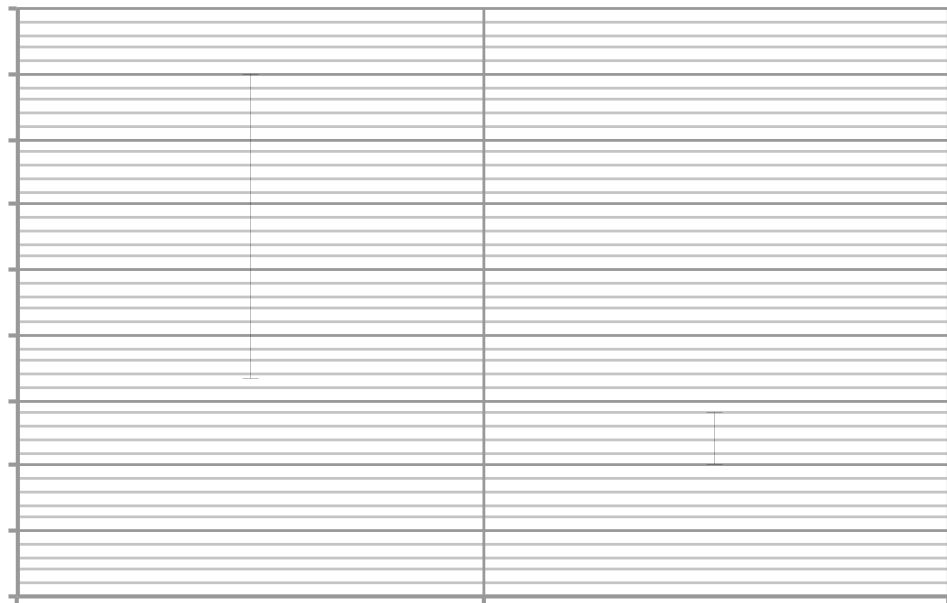
Graph 2:

Independent variable: _____

Dependent variable: _____

Name _____

Draw your graphs below:



Interpret the data:

Make a claim that answers the scientific question.

Support your claim using data as evidence. Describe the relationship between the dependent and independent variables. Refer to specific parts of the table or graph.

Describe your scientific reasoning and explain how the evidence supports your claim.

What do the data from this study tell us about the scientist's hypothesis?

Your next steps as a scientist: Science is an ongoing process. What new question do you think should be investigated? What future data should be collected to answer this question?